



**Spring Hill International School**

**Quiz no.4**

Scholastic Year 2020/ 2021

---

Student's Name:

Class & Section: Grade 4

Teacher's Name: Raghda Ziad

Subject: Math / Checkpoint

Test Duration: 10 mins

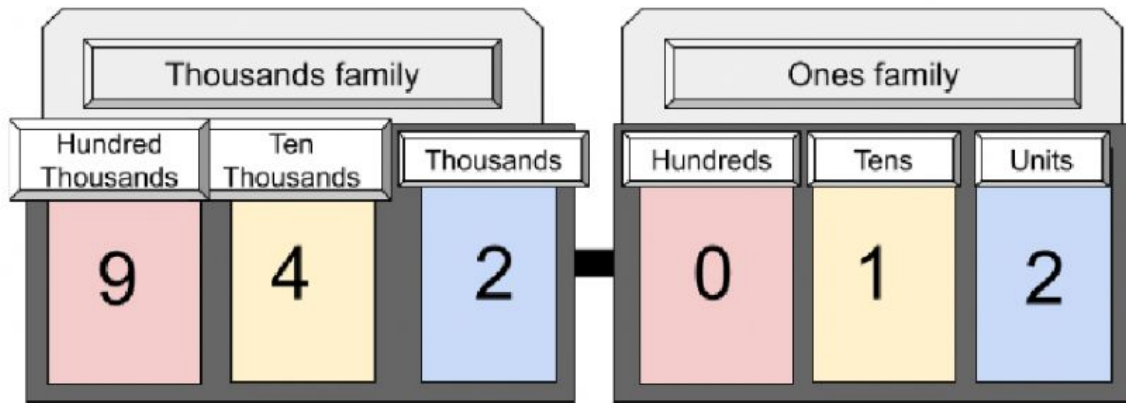
Date: 13 / Oct. / 2020

No. of Questions: 3

No. of Pages: 2

Question Number	Q.1	Q.2	Q.3	Total Mark
Student's Mark				
Question Mark	1	1	3	5

**Question no.1 :**Read the number then click and drag to complete the following forms



**Word Form :** twelve Nine two thousands forty hundreds


.....

**Expanded Form :** 2 2000 900 000 10 40 000

..... + ..... + ..... +..... +.....

**Question no.2:** Put each number through the multiplication and division function machine.

What number comes out the other side ?



**Question no.3:**Workout the ticket prices


Price of 1 ticket



Cost for 10 people



Cost for 100 people



**Good Luck**