

Grade 1 End of Term Examinations 2021

Mathematics


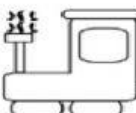


Name: _____

Date: _____

1. Draw a line to match the number names to its numbers.

seven	17
seventeen	7
fourteen	9
nine	14
nineteen	19

2. Fill in the missing numbers.

	1		3		5
	6				10
	11		13		15
	16				20

3. Fill in the missing numbers.

20, _____, 18, _____, 16, _____

There are 6 animals in a line. Troy is at the front of the line.



4. What is Astro's position in the line? _____

5. Who is the last person in the line? _____

6. _____ is the 2nd person in the line.

Use the signs to complete the following number sentences.

$>$

$<$

$=$

7. 10 20

8. 9 3


9. 15 15

10. 0 1

11. Which is the longest?



12. Who is the shortest?



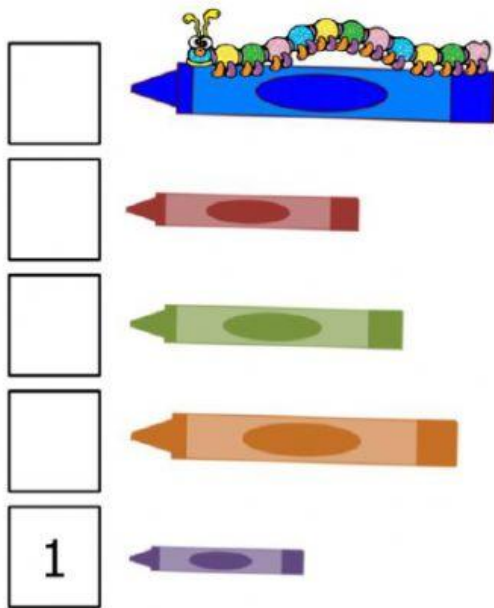
13. Which sock is longer than sock B?



14. The lollipop is _____ paper clips long.



15. Order the objects by length using 1, 2, 3, 4, and 5 starting with the 1 as the shortest.



16. Circle all the names of the shapes that you see in the picture.



- A) Triangle
- B) Rectangle
- C) Circle
- D) Oval
- E) Square

17. Match the following pictures to the correct words.




Natural Object

Straight Path



Curved path



Manmade object

Complete the patterns.

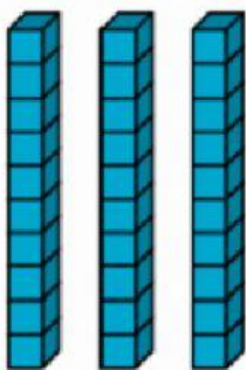
18.

1 1 0 3 1 1 0 _____

19.



20. Use the tens and ones blocks to tell which number is shown.

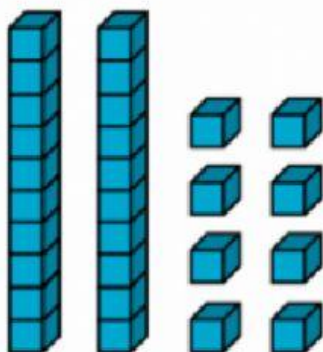


A) 40

B) 30

C) 14

21. Use the tens and ones blocks to tell which number is shown.



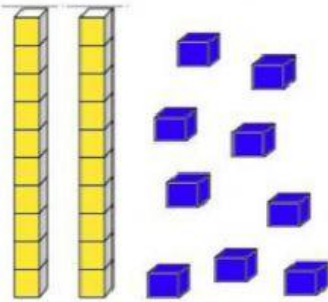
A) 28

B) 15


C) 4

22. Kaili wants to show her classmates 34 using her tens and ones blocks. Which option is correct?

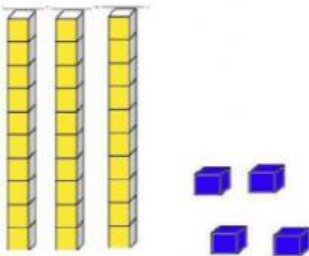
A.



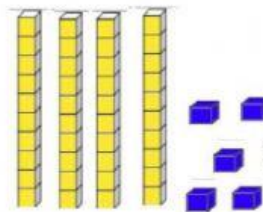
B.



C.



D.



23. When we are writing the number 43 in the place value chart, where does the 4 go?

A) In the Tens (T) column

B) In the Ones (O) column

24. Solve the addition problems below.

	Tens	Ones
+	4	3
	2	5
	<hr/>	

	Tens	Ones
+	3	7
	4	2
	<hr/>	

25. Solve the subtraction problems below.

	Tens	Ones
-	3	6
	1	5
	<hr/>	

	Tens	Ones
-	8	7
	1	1
	<hr/>	