


Problem Solving: Subtraction Story

1.  Circle the correct answer.

Tim buys 4 apples . He eats 1 apple . How many apples  does he have left?


Which is the **subtraction** of this story?

A. $4 > 1$

B. $4 + 1 = 5$

C. $4 - 1 = 3$

2.

There are 5 orange bottles .

I drink 2 orange bottles .


How many orange bottles  are there **left**?

$\underline{\quad} - \underline{\quad} = \underline{\quad}$

There are $\underline{\quad}$ orange bottles  **left**.




3.

Jonah has $\underline{\quad}$ pencils .

He uses $\underline{\quad}$ pencils .

How many pencils  does Jonah have **left**?

$\underline{\quad} - \underline{\quad} = \underline{\quad}$

Jonah has $\underline{\quad}$ pencils  **left**.

