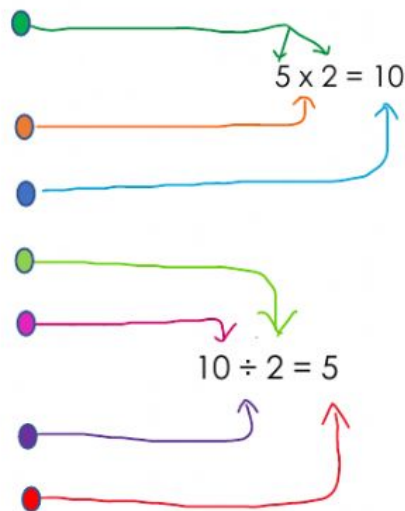



Name: _____ Date: _____









Multiply and Divide by 2

Match the math vocabulary to the multiplication and division sentences by drawing a line from the square to the correct circle.

- product ☐
- dividend ☐
- factors ☐
- symbol to multiply ☐
- divisor ☐
- quotient ☐
- symbol to divide ☐





 Each shape represents a number. See if you can find the numbers that each shape represents:


Example:  +  =  and  +  = 10
 = 3  = 6  = 4

 +  = 

 x  = 10

 = _____

 = _____

 = 4