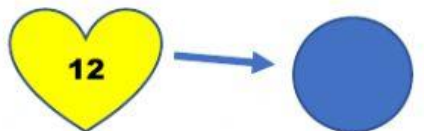
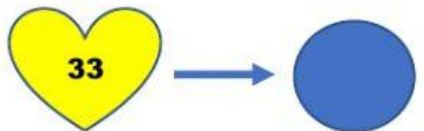
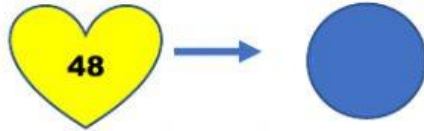
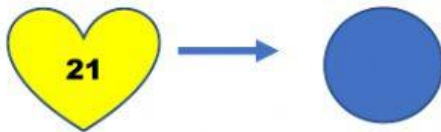


4-Escribe el triple de cada número



4. Escribe el número que corresponde

- | | | | | |
|---|------------|------------|------------|----------------------|
|  | 3 centenas | 8 unidades | 2 decenas | <input type="text"/> |
|  | 5 unidades | 9 decenas | 5 centenas | <input type="text"/> |
|  | 5 decenas | 6 centenas | | <input type="text"/> |
|  | 5 decenas | 3 unidades | 7 centenas | <input type="text"/> |

