





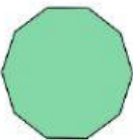





SARASAS PITTAYA SCHOOL
GRADE 6 MATHEMATICS



Name: _____ Class: _____ No. _____

Match the picture to its name.

- | | | | |
|-----|---|---|----------------------|
| 1.) |  | • | Nonagon |
| 2.) |  | • | Pentagon |
| 3.) |  | • | Triangle |
| 4.) |  | • | Decagon |
| 5.) |  | • | Hexagon |
| 6.) |  | • | Quadrilateral |
| 7.) |  | • | Heptagon |
| 8.) |  | • | Octagon |

Answer the questions. Write only the number.

- 1.) How many sides does hexagon have? _____ sides
- 2.) How many interior angles does decagon have? _____ angles