



Sararas Witaed Ratchaphruek School

Academic Year 2020- 2021 2nd Semester

ASEAN Bilingual Program

Mathematics – ABP 3

Name: _____ Class: _____ No.: _____

Test 1


Topic: **Unit 9: Fraction**


Directions: Answer the following questions.

1. What do you call the number **above the line** in a common fraction?
a. numerator b. denominator c. figure

2. What do you call the number **below the line** in a common fraction?
a. numerator b. denominator c. figure




3. It is a numerical quantity that is not a whole number.
a. Fraction b. number c. amount




4. What is the fraction for the shaded part? 
a. $\frac{1}{3}$ b. $\frac{2}{4}$ c. $\frac{1}{4}$




5. What is the fraction for the shaded part? 
a. $\frac{2}{3}$ b. $\frac{3}{4}$ c. $\frac{2}{4}$

Directions: Compare the two fractions using $>$ and $<$.

6.   

7.   

8.   

9.   

10. 