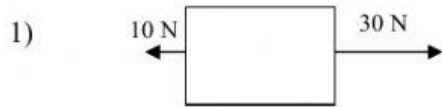
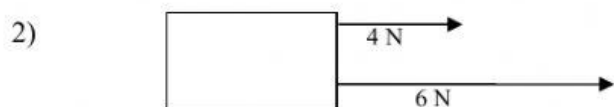


*For each of the following problems, give the net force on the block.*



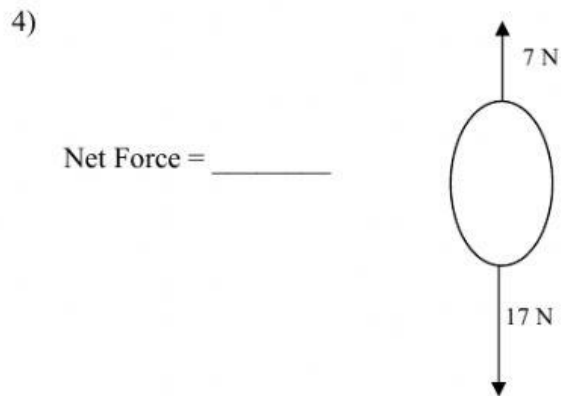
Net Force = \_\_\_\_\_



Net Force = \_\_\_\_\_



Net Force = \_\_\_\_\_



Net Force = \_\_\_\_\_



Net Force = \_\_\_\_\_