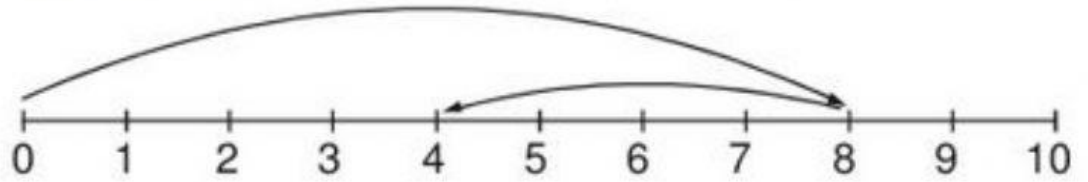
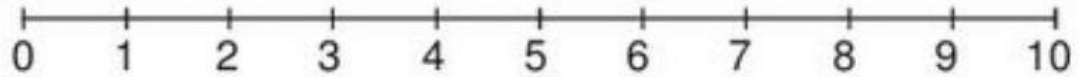


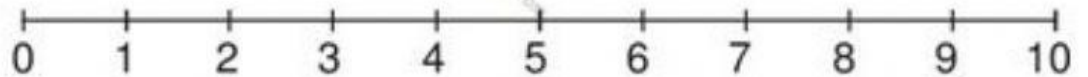
* Completa según el ejemplo:



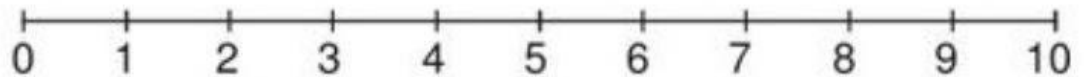
$$\boxed{8} - \boxed{4} = \boxed{4}$$



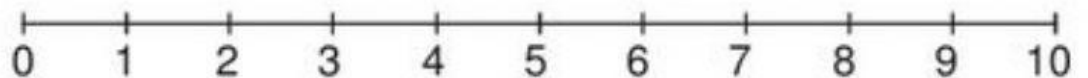
$$\boxed{6} - \boxed{3} = \boxed{}$$



$$\boxed{7} - \boxed{4} = \boxed{}$$



$$\boxed{9} - \boxed{5} = \boxed{}$$



$$\boxed{10} - \boxed{3} = \boxed{}$$