



1. Match the word name to the number.

eight

3

twelve

7

two

eleven

2

11

seven

8

three

12

2. Complete the following.

$$6 + 5 =$$

$$6 + = 12$$

$$+ 3 = 10$$

$$0 + = 11$$

3. Fill in the blanks.

11 is 10 and \_\_\_\_ more.

12 is 10 and \_\_\_\_ more.



4. Match the solid name to the solid shape.

cylinder



sphere



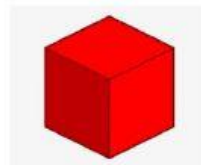
cube



cone



cuboid



5. Read the clue and choose the shape.

I have no faces. I can roll. I am a cone / sphere

I have 6 square faces. I can stack. I am a \_\_\_\_\_

I can roll and I can stack. I am a cylinder / cone


I have one circle face and a point. I am a \_\_\_\_\_

I have 6 rectangle faces. I can stand and stack. I am a cube / cuboid.

6. Select the object that is shortest.



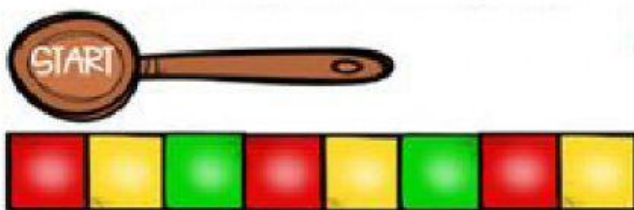
Use 1, 2, 3 to order the objects from **shortest** to **longest**.



7. Measure the object and place the correct answer.



The pen is \_\_\_\_ paper clips long.



The is spoon is as long as \_\_\_\_ blocks.

8. Select the **third** butterfly.

