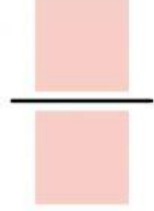
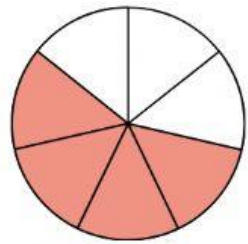

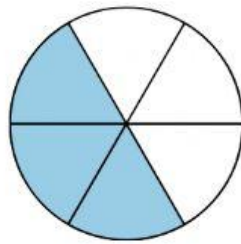
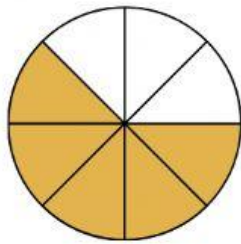

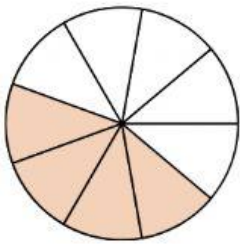




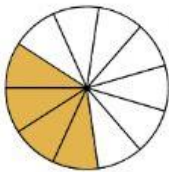
Fracciones



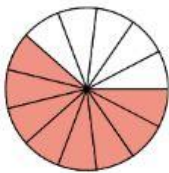
Escribe las siguientes fracciones



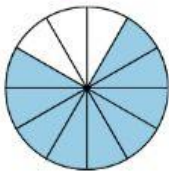
Une cada fracción con su representación



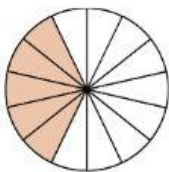
$$\frac{8}{13}$$



$$\frac{5}{14}$$



$$\frac{4}{11}$$



$$\frac{9}{12}$$