



SD AL FALAH DARUSSALAM 2 (ICP)

Review Science

Tahun Pelajaran 2021-2022

Full Name:	Subject:
Class:	Date:
Attendance List:	

﴿Bismillaahirrohmaanirrohiim﴾

I. Answer the questions based on the instruction given.

1. A fish is a Living thing.



Based on the characteristic of living things, click the life processes of a fish.

grow and reproduce
cannot grow but can reproduce
cannot do respiration by itself and need nutrition
can do respiration and doesn't need nutrition.

Read and look the picture below to answer number 2 and 3.

Syafa observes a cat and a robot cat .



a cat



a robot cat

2. Click one similar life process happens to both of a cat and a robot cat.

movement

reproduce

need nutrition

respiration

3. Click one life process which only cat can do.

reproduce

movement

sense and respond

4. Rahman observes the growth of tomato plants . He measures the height of tomato plants each week. Here are the results.

No	Tomato plants	1 st week height in (cm)	2 nd week height in (cm)	3 rd week height in (cm)
1	Tomato plant 1	5	10	20
2	Tomato plant 2	4	8	16
3	Tomato plant 3	4	10	19

- a. Choose which plant **grew the most** during three weeks? Click the correct answer.

Tomato plant 1

Tomato plant 2

Tomato plant 3

- b. Choose which **life processes** does Tomato plant do when it become tall. Click the correct answer.

respiration

reproduction

growth

nutrition

5. Sarah is shorting these animals below into some groups.

Each Living things may be placed in more than one group.

bird

whale

tuna

rabbit

goat

piranha

molly

penguin

Here is Sarah's group. Choose **the suitable name** for the group below. Drag your answer.

animal that has four legs	animal that eat meat
animal that eats grass	animal that giving birth

Group Name	...			
Members	molly	goat	rabbit	whale

6. Look at the picture of the **a cat and penguin**. Why they are different?



a cat







penguin

Fur	Feather	Scale
Laying eggs	Giving birth	

Complete the table below about each of them. Drag the answer by using the words in the box.

	a cat	a penguin
a) body covering		
b) reproduction		

7. Group the types of living things by dragging the words in the box to the correct pictures..

Bacteria	Fungi	Animals	Plants
<div style="border: 1px solid black; height: 20px; width: 100%;"></div>	<div style="border: 1px solid black; height: 20px; width: 100%;"></div>	<div style="border: 1px solid black; height: 20px; width: 100%;"></div>	<div style="border: 1px solid black; height: 20px; width: 100%;"></div>
			
cat	mold	lactobacillus	succulent

8. Tick (✓) the correct statements below.

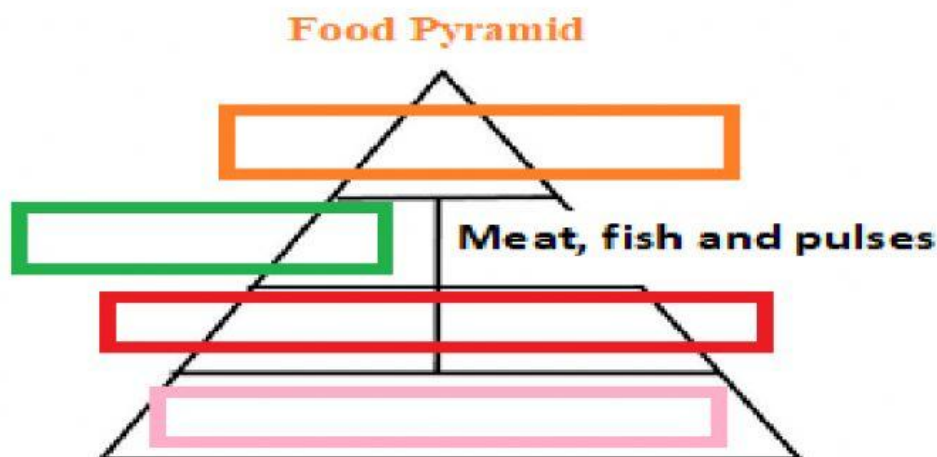
Statements	Tick (✓)
Dairy products are good for our bones and teeth	
Eating salty, fatty and sugary food make people have heart attack disease	
The more we eat the fatty food the more healthy we become	

9. Choose **two correct advantages** of doing exercise for our body. Click your answer.

Exercise makes you feel good	Exercise make us lazy
Exercise make us unhealthy	Exercise keeps the Balance

10. Complete this pyramid food below. One have been done for you.

Carbohydrate	Milk & Dairy products	Vegetable & fruit
Food with a lot of Fat & sugary food	Meat, fish and pulses	



11. Tick (✓) the correct exercises below which can make us flexible.



Run



stretching



swimming



yoga

12. Some of the foods we eat can damage our health, and we call as unhealthy food

a. Hamburger can also damage our health.

Type two things in hamburger, which can damage our health.

-
-

b. Milk contains things the body needs to keep healthy.

Type one of these things.

13. Look at this calories list below.



Popular Types of Snacks

	Fat(g)	Carbs(g)	Prot(g)	Calories
Sweet Snacks (1 snack serving)				
■ Apple	0.23	19.06	0.36	72
■ Chocolate Creme Filled Snack Cake	7.25	30.15	1.70	188
■ Chocolate Chip Crisped Rice Bar	3.78	20.44	1.43	113
■ Cookie	2.14	6.90	0.54	49
■ Doughnut	10.51	21.62	2.62	190
■ Hard Granola Bar	4.95	16.10	2.52	118
■ Leather Fruit Bar	1.22	18.06	0.41	81
■ Licorice	0.01	10.29	-	41
■ Milk Chocolate Candy Bar	13.05	26.14	3.37	235
■ Soft Raisin Granola Bar	7.65	28.55	3.27	193
■ Taffy	0.89	9.20	0.09	44

a. Based on the list above, which snack has the highest number of calories?

b. Moreover, which snack has the lowest calories?

c. Which food that has the highest carbohydrate (carbs)?

14. Maryam and Musa measure their pulse rate.



- Maryam has a pulse rate of 70 beats every minute.
- Musa has a pulse rate of 75 beats every minute.

They want to find out how exercise changes their pulse rate.

a. Predict Musa's pulse rate after exercise.

Click the correct answer.

50 55 60 70 75 80

b. Maryam does some exercise.

Musa does some exercise.

They want to compare their pulse rates.

What things they must do to make this a fair test? Click your answer.

Same place and same exercise

Same duration (time) and same day

Same exercise and duration (time) of exercise

15. Drag the correct senses which used by the statements below.

sight	taste	smell	hearing	touch
-------	-------	-------	---------	-------

a. I can hear the sound of birds singing outside my windows.

b. Herra vomiting after smelling the rotten meat.


c. My mom's apple pie is so delicious. I can eats a lot of it.

16. Look at this fruit. What two things can you observe about it using your sense of sight. Click your answer.


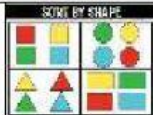


sweet	texture
size	light smell

17. Look at this picture below and click what sense they lost and what sense they use.

No	Activity	Sense they lost	Sense they use
1		Sense of Sight	Sense of sight
		Sense of hearing	Sense of taste

18. Look at this picture below and **tick (✓)** the correct sense used to observe it.

No	Activity	Sense of sight	Sense of hearing	Sense of smell	Sense of touch	Sense of taste
1	 Touching butterflies					
2						

19. **Syafa** and her friends are blind. They want to memorize Al Qur'an. They always recites Al Qur'an with their Ustadzah every day



a. What sense syafa and her friends used to read the braille bumps in Qur'an? Click your answer.

Sense of smell

Sense of touch

Sense of sight

b. What sense which they do not have? Click your answer.

Sense of smell

Sense of touch

Sense of sight



20. Look at this table below and complete the sentence by using the words in the box.

pull	away	push
------	------	------

c. A force is a ... or a ...

d. Push is a force, which moves an object ... from something.

21. Tick (✓) "push" or "pull" for the correct answer.

No	Activity	Push	Pull
1			
2			

22. Complete this table below by dragging the words in the box to the correct column.

leather	balloon	animal	plants	cotton
---------	---------	--------	--------	--------

Source	Natural materials	Object
...	Sap of rubber tree	...
	...	T-shirt

23. Classify these materials below into the correct column.

leather	rocks
glass	plastic

Natural Materials	Man made

24. Choose the correct words of where this thing comes from. Write your answer.

wood	plastic	rock
------	---------	------

a. a desk

b. A bottle

﴿Alhamdulillahirobbil aalamiin﴾