

Name \_\_\_\_\_ Date \_\_\_\_\_

### Telling Time – Five Minute Intervals

1. Look at these activities. How long do you think each activity takes? Choose the best answer.



- 5 minutes
- 5 months
- 5 hours



- 4 days
- 4 hours
- 4 months

2. Read each activity you do each day. Choose one of these descriptions for each activity.

- a) Ride a bike             less than an hour             more than an hour
- b) Brush your teeth     less than an hour             more than an hour
- c) Do homework         less than an hour             more than an hour
- d) Eat your dinner        less than an hour             more than an hour

3. Which of these activities will take more time?

- a. playing a video game OR playing a game of football
- b. washing your face OR having a bath
- c. going to school OR going to visit your cousins on another island

4. Which of these activities will take less time?

- a. putting on your shoes OR getting dressed for school
- b. walking to school OR driving to school
- c. reading a whole book OR having breakfast

5. If it takes 10 minutes to have a shower every day and there are 7 days in a week, how long do you spend in the shower every week?


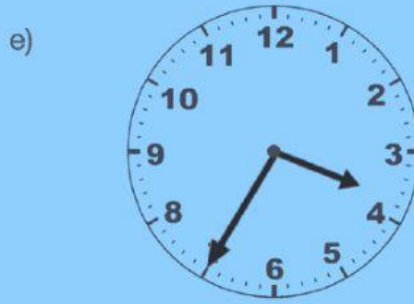


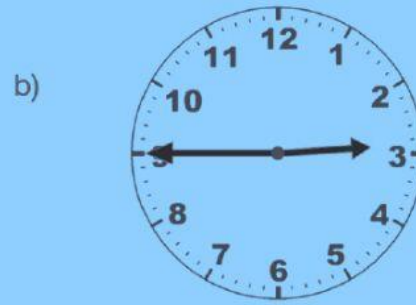

\_\_\_\_\_

6. Complete the following sentences.

We measure time in minutes, \_\_\_\_\_, days, \_\_\_\_\_, \_\_\_\_\_ and years. Some things take \_\_\_\_\_ time to do than others. It takes longer to play basketball than it does to \_\_\_\_\_.

It takes less time to have a bath than it does to \_\_\_\_\_.

Write down the times shown



Use your time wisely - "Study to show yourself to be wise."

RUL @  
Lewis Yard Primary