








Counting Coins – Quarters Only

How much money is shown by the coins?

<u>5</u> How Many?	<u>\$1.25</u> How Much?	
<u> </u> How Many?	<u> </u> How Much?	
<u> </u> How Many?	<u> </u> How Much?	
<u> </u> How Many?	<u> </u> How Much?	
<u> </u> How Many?	<u> </u> How Much?	
<u> </u> How Many?	<u> </u> How Much?	
<u> </u> How Many?	<u> </u> How Much?	
<u> </u> How Many?	<u> </u> How Much?	