












Name _____

Date _____



SUBTRACTION PROBLEMS TO 20 SHEET 1

		WORKING OUT
1)	Newton has 15  . Frazer has 12  . What is the difference? _____	
2)	There are 17  . 10  fly away. How many  are left? _____	
3)	A shop has 16  . 8  are sold. What is 16 minus 8? _____	
4)	Captain reads 18  . Tyger reads 4  . How many more books has Captain read? _____	
5)	I have \$20. I spend \$8. How much money do I have left? \$ _____	
6)	I buy 14  . I eat 9  . How many do I have left? _____	

