



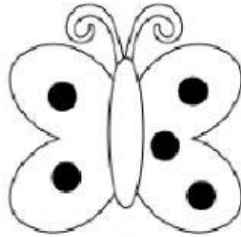
Name: _____

Date: _____

How many Butterflies- Worksheet 2




Addition




$$2 + 3 = \square$$




$$4 + 2 = \square$$



$$3 + 1 = \square$$



$$4 + 3 = \square$$



$$3 + 3 = \square$$