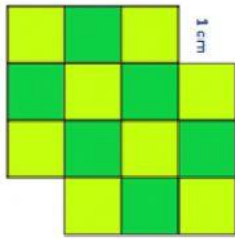
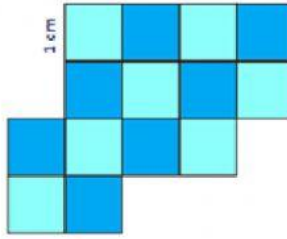


Área


1. Calcula el área de estas figuras.



$$A = \boxed{} \text{ cm}^2$$

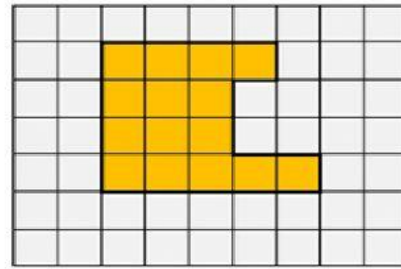
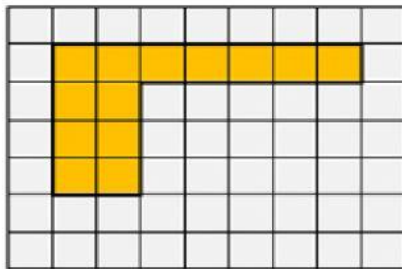


$$A = \boxed{} \text{ cm}^2$$

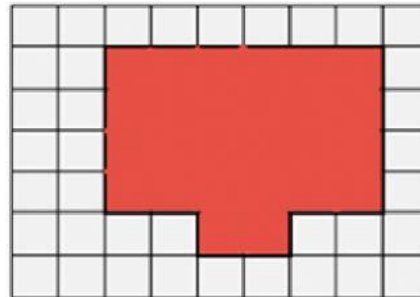
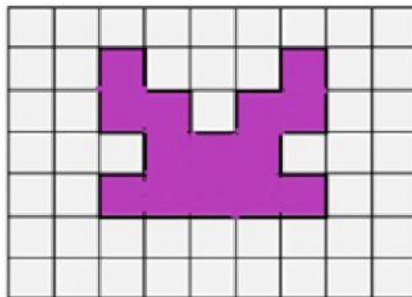


$$A = \boxed{} \text{ cm}^2$$

2. Selecciona la figura que tenga un área menor.



3. Elige la figura que un área mayor.



4. Relaciona las figuras que miden la misma área, únelas.

