

Name:

Practice 3 Telling the Amount of Money

1. How much money is there?

(a)  ¢


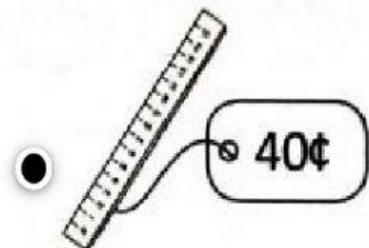
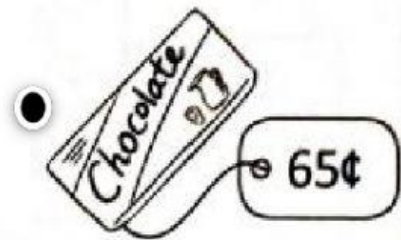
(b)  ¢

(c)  \$

(d)  \$

(e)  \$

2. Match the money to the correct things.



3. Match the money to the correct things.

