

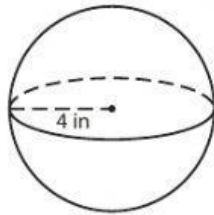
Name: _____

Volume - Spheres

Integers: ES1

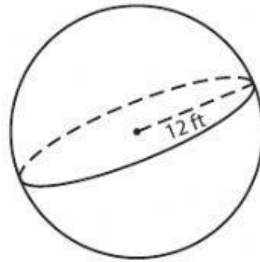
A) Find the volume of each sphere. Round your answer to two decimal places.
(use $\pi = 3.14$)

1)



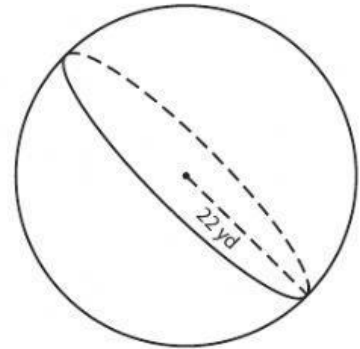
Volume = _____

2)



Volume = _____

3)



Volume = _____

B) Find the volume of each sphere from the given parameter. Round your answer to two decimal places. (use $\pi = 3.14$)

4) radius = 7 in

Volume = _____

5) radius = 2 yd

Volume = _____

6) radius = 15 ft

Volume = _____

7) radius = 18 in

Volume = _____

8) Find the volume of a sphere whose radius is 23 feet. Round your answer to two decimal places. (use $\pi = 3.14$)