

Comparing fractions with same denominator

Grade 3 Fractions Worksheet

Write > (greater than), < (less than) or = (equal to) between the fractions.

1)



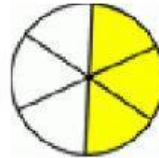
$$\frac{1}{4}$$

<

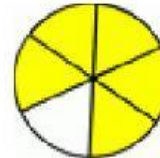


$$\frac{2}{4}$$

2)



$$\frac{3}{6}$$



$$\frac{5}{6}$$

3)

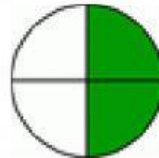


$$\frac{2}{8}$$

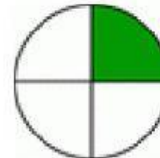


$$\frac{4}{8}$$

4)



$$\frac{2}{4}$$

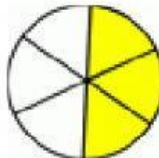


$$\frac{1}{4}$$

5)

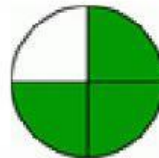


$$\frac{5}{6}$$

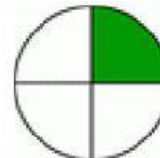


$$\frac{3}{6}$$

6)

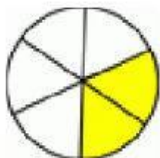


$$\frac{3}{4}$$

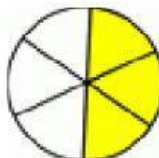


$$\frac{1}{4}$$

7)



$$\frac{2}{6}$$

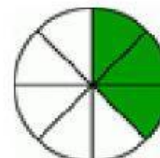


$$\frac{3}{6}$$

8)



$$\frac{2}{8}$$



$$\frac{3}{8}$$