


Name:

Date:


Predict the next number in the pattern below.

(a)




What is the pattern rule?

(b)



What is the pattern rule?

(c) Start at 40. Add 10 each time.



The above pattern is a:

Growing Pattern	Shrinking Pattern	Repeating Pattern
-----------------	-------------------	-------------------

(d) Start at 40. Subtract by 5 each time.



The above pattern is a:

Growing Pattern	Shrinking Pattern	Repeating Pattern
-----------------	-------------------	-------------------