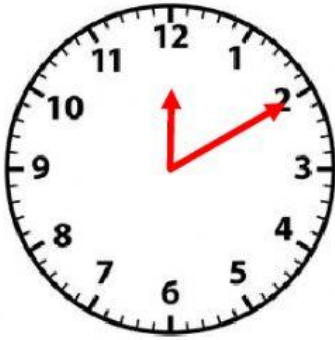


## Elapsed Time



**Clock A**

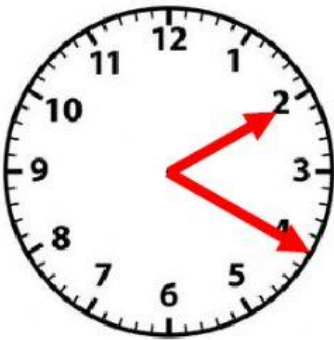


**Clock B**

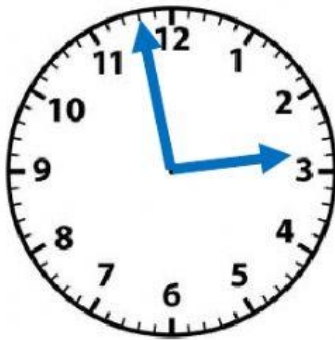
**Clock A** shows what time? \_\_\_\_\_

**Clock B** shows what time? \_\_\_\_\_

What is the Elapsed Time? \_\_\_\_\_ minutes



**Clock A**



**Clock B**

**Clock A** shows what time? \_\_\_\_\_

**Clock B** shows what time? \_\_\_\_\_

What is the Elapsed Time? \_\_\_\_\_ minutes



**Clock A**



**Clock B**

**Clock A** shows what time? \_\_\_\_\_

**Clock B** shows what time? \_\_\_\_\_

What is the Elapsed Time? \_\_\_\_\_ minutes