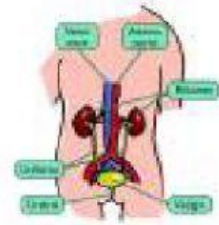
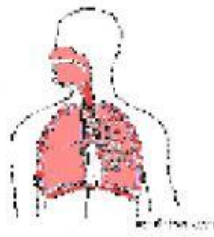
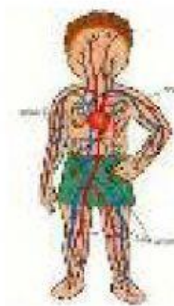


## REPASO SCIENCE PARA EL EXAMEN (UNIT 1)

1. Match each system with its picture.



Digestive system

Circulatory system

Respiratory system

Excretory system

2. Complete the sentences with the correct word.

lungs

stomach

nose

mouth

### RESPIRATORY SYSTEM:

We breathe with the \_\_\_\_\_ or mouth.

The air goes to the \_\_\_\_\_

### DIGESTIVE SYSTEM:

We eat with the \_\_\_\_\_

The food goes to the \_\_\_\_\_ and the intestines.

3. Choose the correct word.



\_\_\_\_\_

\_\_\_\_\_

\_\_\_\_\_

\_\_\_\_\_

\_\_\_\_\_

4. Tick the five senses:

