



Teacher: Mr. Jaffet Pineda
Mrs. Ana Gutiérrez

1. **Instructions:** Drag and drop the name of each part of a division to its part.

Divisor

Dividend

Quotient

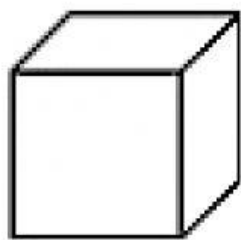
Remainder

2. **Instructions:** Solve the following divisions:

- $10 \div 2 =$
- $25 \div 5 =$
- $24 \div 6 =$
- $49 \div 7 =$
- $18 \div 3 =$

3. Instructions: Draw a line to match the geometrical solid with the correct object.

cube



•

•



cone

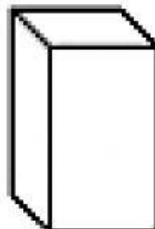


•

•

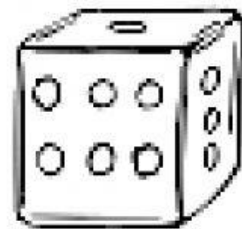


**rectangular
prism**




•

•



cylinder

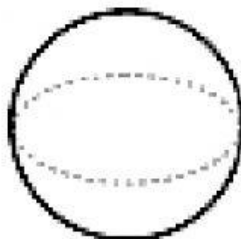


•

•




sphere



•

•




4. **Instructions:** Write the amount of money in the blank.



=



=



=

