

BẢNG TRỪ

1 **Viết số** vào chỗ chấm.

a) $11 - 5 = 11 - 1 - \dots$

$12 - 7 = 12 - 2 - \dots$

$13 - 4 = 13 - \dots - 1$

$14 - 8 = 14 - \dots - 4$

b) $15 - 6 = 15 - \dots - 1$

$16 - \dots = 16 - 6 - 2$

$17 - \dots = 17 - 7 - 2$

$18 - \dots = 18 - 8 - 1$

2 **Viết số và phép tính** để có bảng trừ hoàn chỉnh.

$11-2=9$									
$11-3=8$	$12-3=9$								
$11-4=7$	$12-4=8$	$13-4=...$							
$11-5=...$	$12-5=...$						
$11-6=...$	$12-6=6$...	$14-6=8$	$15-6=9$					
$11-7=...$...	$13-7=...$				
...	$12-8=...$	$15-8=...$	$16-8=...$...			
...	$14-9=5$	$17-9=...$	$18-9=...$		

3 **Tính nhẩm.**

$12 - 4 = \dots$

$17 - 9 = \dots$

$11 - 3 = \dots$

$15 - 6 = \dots$

$13 - 5 = \dots$

$14 - 7 = \dots$

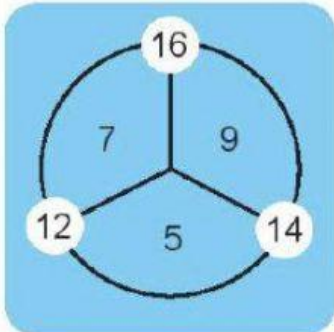
$16 - 7 = \dots$

$18 - 9 = \dots$

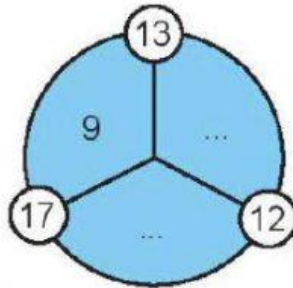
$12 - 8 = \dots$

4 Số? (theo mẫu)

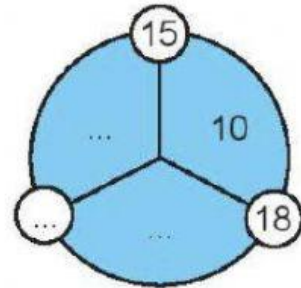
Mẫu:



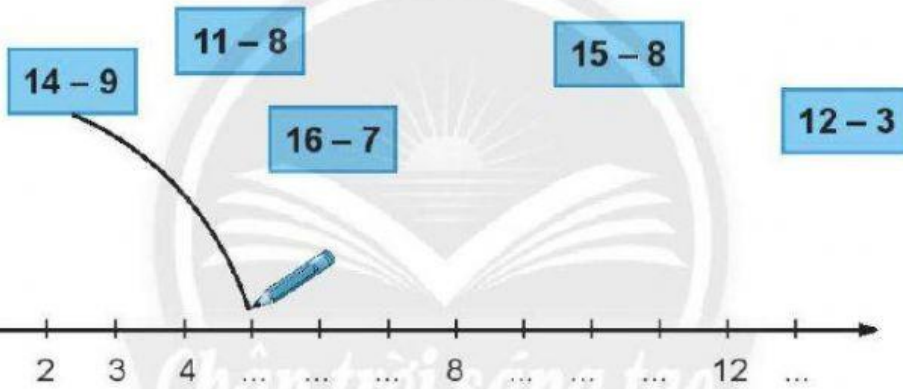
a)



b)



5 Nói (theo mẫu).



6 Vẽ số chấm tròn thích hợp vào hai tấm bìa để trống.

