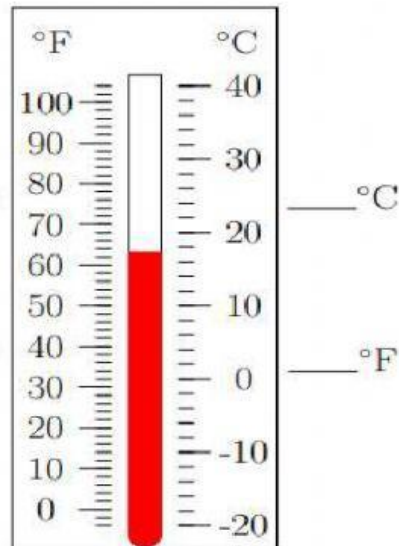
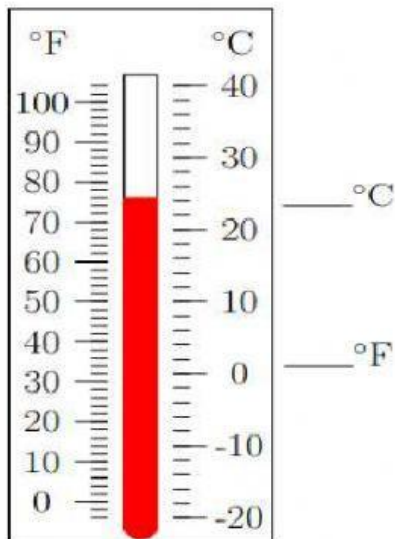
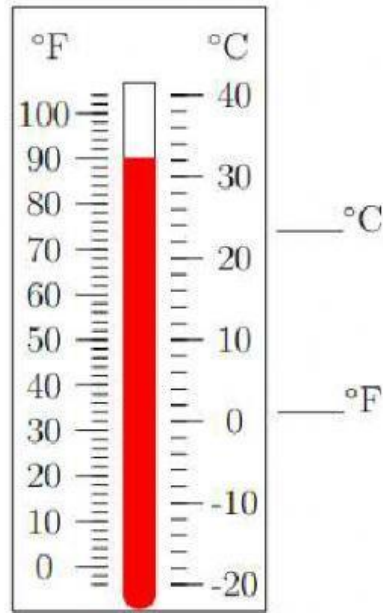
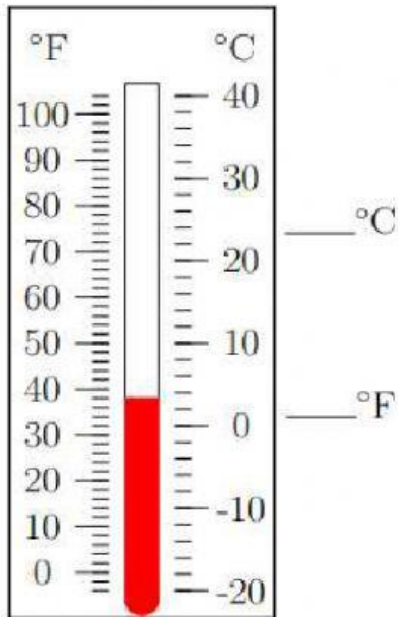


# Temperature

Read the temperatures on the thermometers below. Select the correct temperatures.



Study the chart below and answer the questions.

Day	Mon.	Tue.	Wed.	Thurs.	Fri.
Place	outside office	outside office	outside office	outside office	outside office
Time	9.30 a.m.	9.30 a.m.	9.30 a.m.	9.30 a.m.	9.30 a.m.
Temperature	86 °F	84 °F	81 °F	84 °F	87 °F

On which day was the temperature the highest?

On which day was the temperature the lowest?

On which days was the temperature the same?

What was the highest temperature? °F

What was the lowest temperature? °F

What is the difference between the highest and the lowest temperatures? degrees