



Name: _____


Date: _____

Assessment

1 Write the missing numbers.

a.  $\square + \square + \square + \square = \square$
4 groups of 2 \square twos = \square


b.  $\square + \square + \square + \square + \square = \square$
5 groups of 7 \square sevens = \square

c.  $\square + \square + \square = \square$
3 groups of \square $\square \times \square = \square$

2 Write the multiplication sentences.

a.  $\square \times \square = \square$

6 groups of 5

b.  $\square \times \square = \square$

7 groups of 2

3 Complete.

Each bundle has 10 pencils.



$$7 \times 10 = 70$$

$$8 \times 10 = \square$$

10 more

How many pencils are there in 9 bundles ?

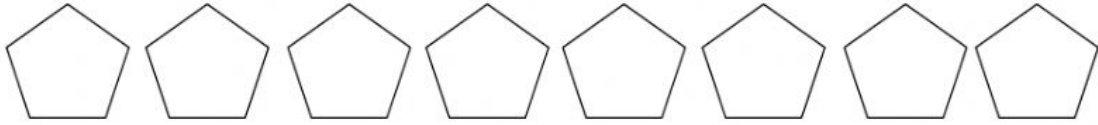
$$9 \times \square = \square$$

There are \square pencil in 9 bundles.

4 Solve.

- a. A pentagon has 5 sides.

How many sides do 8 pentagon have?



$$\square \times \square = \square$$

There are \square sides altogether.

- b. There are 2 pencils in a pencil case.

How many pencil are there in 6 pencil case?



$$\square \times \square = \square$$

There are \square pencils altogether.

- c. There are 5 bags of potatoes.

Each bag has 10 potatoes.

How many potatoes are there altogether?

$$\square \times \square = \square$$

There are \square pencils altogether.

How do you do your worksheet?

(write A, B, or C)



A. I can do the worksheet
by myself



B. I need a little help



C. I need a lot of help