

Name: _____

MATHEMATICS – LINES OF SYMMETRY

Look at the shapes below. There are two boxes below each shape. The first box is a Yes or No box (If you believe that the shape has a line of symmetry or not). You must type the number of lines of symmetry the shape has in the second box.

E.g.

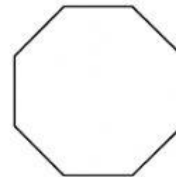


Yes 1


1



6




2



7




3



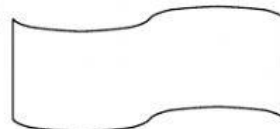
8



4



9



5



10

