


Name:

Date:

Topics: Lines of Latitude and Longitude

Section A: Lines of Latitude

Instructions: Locate each letter on the drawing below, decide the number of degrees each letter is and state whether it is North or South of the Equator.

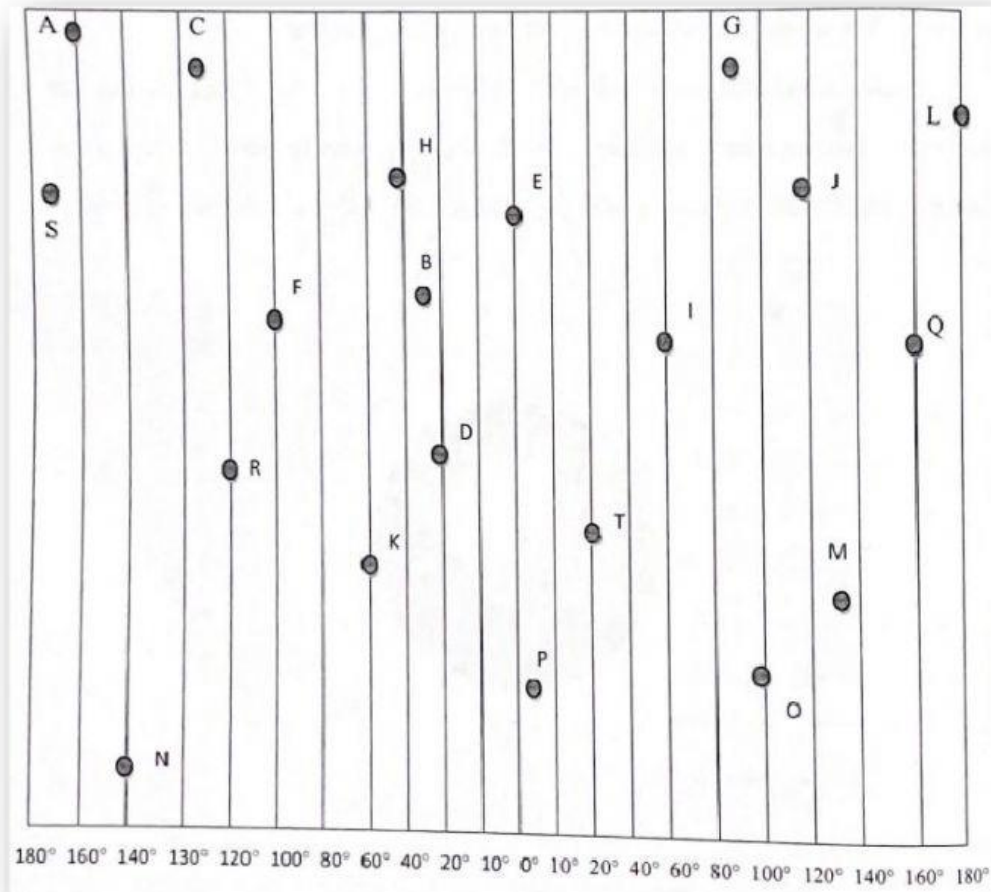


1. A _____
2. B _____
3. C _____
4. D _____
5. E _____
6. F _____

7. G _____
8. H _____
9. I _____
10. J _____
11. K _____
12. L _____
13. M _____
14. N _____
15. O _____
16. P _____
17. Q _____
18. R _____
19. S _____
20. T _____

Section B: Lines of Longitude

Instructions: Locate each letter on the drawing below, decide the number of degrees each letter is and state whether it is East or West of the Prime Meridian.




21. A _____
22. B _____
23. C _____
24. D _____
25. E _____
26. F _____
27. G _____

28. H _____
29. I _____
30. J _____
31. K _____
32. L _____
33. M _____
34. N _____
35. O _____
36. P _____
37. Q _____
38. R _____
39. S _____
40. T _____

Section C: Grids

Instructions: Use the grid to answer these questions.



41. What is in block C1? _____
42. What is in block B2? _____
43. What is in block C2? _____
43. What is in block A1? _____
44. What is in block B3? _____
45. In what block is the car? _____
46. In what block are the bat and ball? _____
47. In what block is the teddy bear? _____
48. In what block is the house? _____
49. In what block is the frog? _____