





# WORKSHEET (10.11.2021)

## I. Find the mistakes and correct:

1. I have to do my homework yesterday. ....
2. We will used flying cars in the future. ....
3. He must try my best at school. ....
4. What did they did in the past? ....

## II. Look at the picture and answer:

	What did they do yesterday? They.....		What did he do last Monday? He.....
	Where will people live in the future? People.....		Will plastic bags disappear in the future? .....

## III. Read and answer:

### ASTRONAUTS

Astronauts are people who know a lot about space. They are clever because they study and discover facts about stars and planets. They might discover new information about stars shapes. They are intelligent because they can study weather on each planet. Astronauts can travel in space. They must use computers for life in space. The biggest problem is that everything floats in space. It's impossible to walk or lie in bed in space. Astronauts spend many hours in space. Astronauts should wear special suits to protect them.



#### A. Choose True or False:

1. Astronauts are people who work in space. ....
2. They study about insects and plants ....
3. It isn't important to use computers in space. ....
4. Astronauts spend many hours in space. ....

#### B. Answer:

1. What should astronauts wear in space? .....
2. What can't they do in space? .....
3. What new information do they discover about? .....
4. Can everything float in space? .....

## IV. Solve the problems:

1. For every 5 boys on a softball team there are 2 girls:

a. What is the ratio of boys to girls?

A.5:2                      B.2:5                      C.5:7

b. How many girls in the team if there are 25 boys?

A.25                      B.10                      C. 35

2. At the pet shop, the number of dogs is twice the number of cats. How many dogs if the total number of pets is 30.

A.10                      B.15                      C.20

## V. Calculate:

$$\frac{3}{5} + \frac{5}{3} = \text{---}$$

$$4\frac{1}{7} - \frac{2}{5} = \text{---}$$

$$6\frac{8}{9} + 1\frac{1}{2} = \text{---}$$