

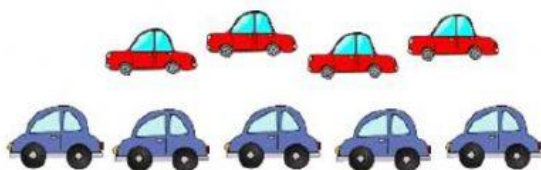
Practice 1. Mathematics Grade 1

Bismillahirrahmaanirrahim

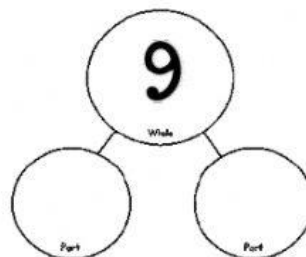
Read the instructions well to answer correctly.

1) Type the missing numbers.

a)



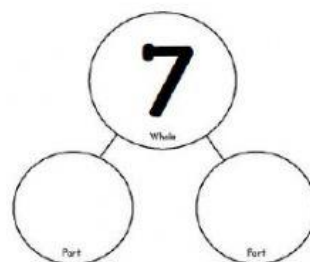
4 and _____ make 9.



b)

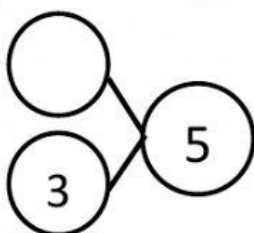


_____ and _____ make 7.

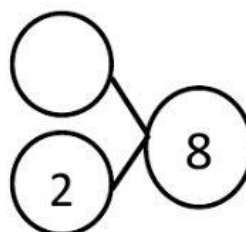


2) Type the missing numbers.

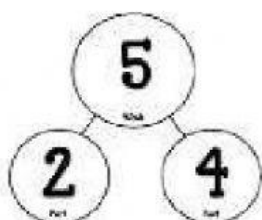
a)



c)



3) Is this correct? Choose 'YES' or 'NO'.



YES

NO

4) Write the missing numbers.

a) Mother buys 6 apples and 2 mangoes.

How many fruits does mother buy altogether?



$$\square + \square = \square$$

Mother buys _____ fruits altogether.

b) There are 5 boys and 2 girls.



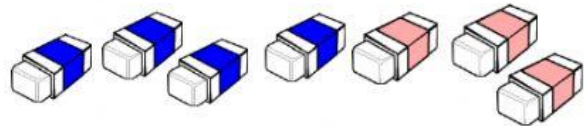
How many children are there **altogether**?

$$\square + \square = \square$$

There are _____ children altogether.

b) Hasan has 4 erasers.

He buys more 3 erasers.



How many erasers does he have **altogether**?

$$\square + \square = \square$$

Hasan has _____ erasers altogether.

c) Mom buys 3 apples, 2 oranges and 1 mango.

How many pieces of fruit does she buy **in all**?



$$\square + \square + \square = \square$$

Mom buys _____ pieces of fruit in all.

d) Kamila bakes 4 chocolate muffins, 3 vanilla muffins and 2 banana muffins.

How many muffins does she bake **in all**?



$$\square + \square + \square = \square$$

Kamila bakes _____ muffins in all.

Alhamdulillahirrahil'alamiin

