



Name: _____ Date: _____


Application

Writing Number Sentences


 Listen to the word problem then fill in the addends to complete the number sentences.

 1. The numbers 2, 5 and 7 are a part of a fact family. Write two addition number sentences to show their family.


$$\begin{array}{rcccl} 2 & + & 5 & = & 7 \\ \underline{\hspace{1cm}} & + & \underline{\hspace{1cm}} & = & 7 \end{array}$$

 2. The numbers 2, 4 and 6 are a part of a fact family. Write two addition number sentences to show their family.

$$\begin{array}{rcccl} 2 & + & 4 & = & 6 \\ \underline{\hspace{1cm}} & + & \underline{\hspace{1cm}} & = & 6 \end{array}$$

 3. The numbers 4, 5 and 9 are a part of a fact family. Write two addition number sentences to show their family.

$$\begin{array}{rcccl} 4 & + & 5 & = & 9 \\ \underline{\hspace{1cm}} & + & \underline{\hspace{1cm}} & = & 9 \end{array}$$

 4. The numbers 3, 4 and 7 are a part of a fact family. Write two addition number sentences to show their family.

$$\begin{array}{rcccl} 3 & + & 4 & = & 7 \\ \underline{\hspace{1cm}} & + & \underline{\hspace{1cm}} & = & 7 \end{array}$$