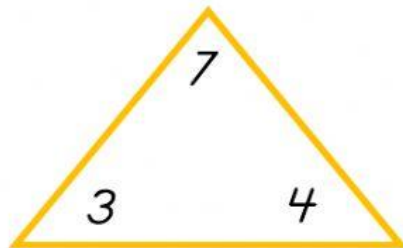


Name: _____ Date: _____

Concepts
Fact Families

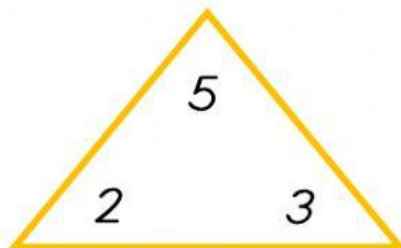
Look at the three digits and fill in the missing addends.

1.



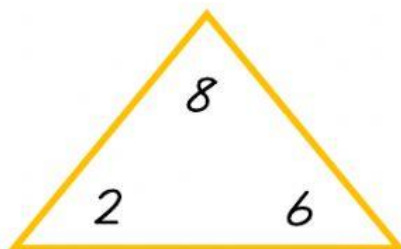
$$\begin{array}{rcl} \underline{\quad} & + & \underline{\quad} = 7 \\ \underline{\quad} & + & \underline{\quad} = 7 \\ 7 & - & 3 = 4 \\ 7 & - & 4 = 3 \end{array}$$

2.



$$\begin{array}{rcl} \underline{\quad} & + & \underline{\quad} = 5 \\ \underline{\quad} & + & \underline{\quad} = 5 \\ 5 & - & 2 = 3 \\ 5 & - & 3 = 2 \end{array}$$

3.



$$\begin{array}{rcl} \underline{\quad} & + & \underline{\quad} = 8 \\ \underline{\quad} & + & \underline{\quad} = 8 \\ 8 & - & 2 = 6 \\ 8 & - & 6 = 2 \end{array}$$