








FORMATIVE PRACTICE

Answer Questions 1 to 4 based on the following diagram.







The diagram shows the locations of five types of fruits.

5					
4					
3					
2					
1					
	A	B	C	D	E

1. State the location of the watermelon.
A D4
B D5
C E3
D E5
2. State the fruit at the B4.
A Durian
B Apple
C Pineapple
D Orange
3. The orange is at
A 2C
B 4B
C C2
D B4
4. Which fruit is at the same row as B3?
A Apple
B Durian
C Pineapple
D Watermelon

Answer Questions 5 to 8 based on the following diagram.

The diagram shows the locations of six objects.

5					
4					
3					
2					
1					
	A	B	C	D	E

5. State two objects which are at the same row.
A Glue and book
B Book and scissors
C Scissors and pen
D Pen and eraser
6. Two objects which are at the same column are
A scissors and glue
B calculator and pen
C eraser and calculator
D book and scissors
7. Which object is at E3?
A Scissors
B Glue
C Calculator
D Pen
8. The book is at
A B2 B C2
C D1 D E3