

Name: _____

class: _____

Menu Math

Using the prices indicated, calculate the amount needed to purchase the choices shown in each column.



RM1



RM4.20



RM1.70




RM3.50



RM2.00



RM2.50




RM5.90

RM7.90

RM8.90

Total:




RM 10.20

RM 13.20

RM 15.20

Total:



RM 7.70

RM 5.70

RM 9.70

Total: