
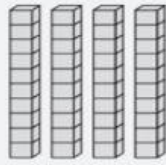
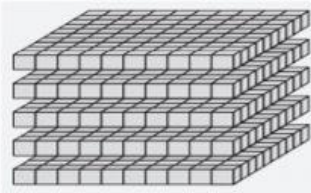


# Compter au-delà de 100.



Ecris les nombres représentés en chiffre puis en lettres.



a)



b)



c)

