

Name - _____

Class – 4 to 6

Data Handling








Subject ---- Mathematics (Math)

Topic ----- Data Handling

Grade ----- 4 to 6

Age-- 8 to 11/12

Rahul plays cricket every day. He loses few balls while playing. This pictograph shows the number of balls lost in a week by Rahul.

Days	Number of Balls
Sunday	
Monday	
Tuesday	
Wednesday	
Thursday	
Friday	
Saturday	

Answer the following questions:-

1. On which day were most balls lost
_____.
2. How many balls were lost on Monday
_____.
3. On which day were least balls lost
_____.
4. How many balls did Rahul miss including all the weeks? (In no. name)
_____.