


Year 1
Final Assessment

Count and write.



Write the numbers in words.

- (a) 11
- (b) 12
- (c) 13
- (d) 14

(e) 24

(f) 38

(g) 45

(h) 57

(i) 86

Write the numerals.

(a) nineteen

(b) eighty six

Write the greater numbers.

(a) 17 or 15

(b) 69 or 96

Write the smaller numbers.

(a) 32 or 23

(b) 71 or 91

before

between

after

21

.....

23

.....

30

.....

37

.....

39

49

.....

.....

.....

99

.....

Count.

Fill in the blanks.



_____ = _____ tens + _____ ones

_____ = _____ + _____

Solve the followings.

(a) $3 + 6 =$ _____

(b) $11 + 7 =$ _____

(c) $70 + 20 =$ _____

(d) $7 - 3 =$ _____

(e) $19 - 5 = \underline{\quad}$

(f) $90 - 20 = \underline{\quad}$

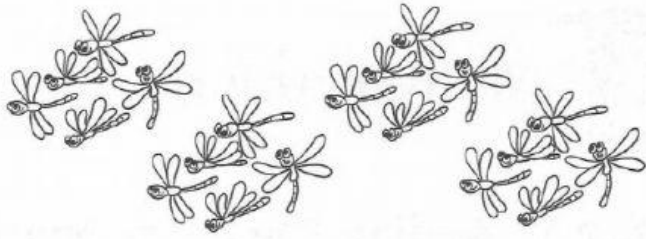
(g)
$$\begin{array}{r} 27 \\ + 35 \\ \hline \end{array}$$

(h)
$$\begin{array}{r} 95 \\ - 47 \\ \hline \end{array}$$


(i)
$$\begin{array}{r} 98 \\ - 79 \\ \hline \end{array}$$

(j)
$$\begin{array}{r} 64 \\ + 36 \\ \hline \end{array}$$


Fill in the blanks.



$$5 + 5 + 5 + 5 = \underline{\hspace{2cm}} \dots\dots\dots 4 \text{ fives} = \underline{\hspace{2cm}}$$



$$4 + 4 + 4 = \underline{\hspace{2cm}} \dots\dots\dots 3 \text{ fours} = \underline{\hspace{2cm}}$$

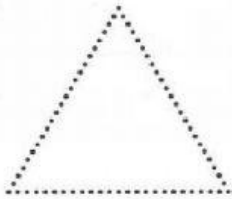



There are _____ monkeys altogether.

There are _____ trees.

There are _____ monkeys on each tree.

Match.



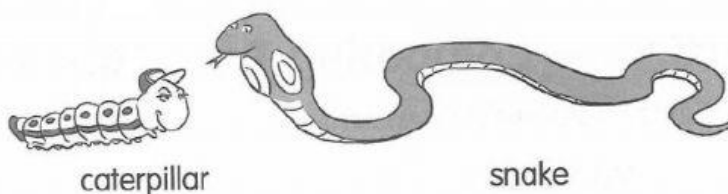
triangle

square

rectangle

circle

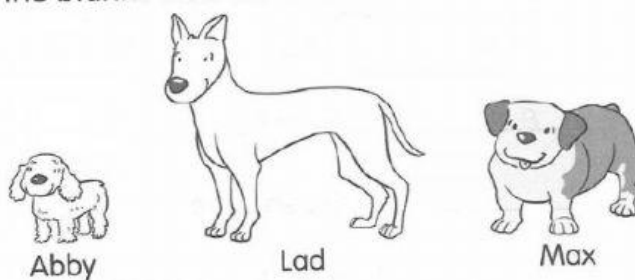
Which is longer?
Which is shorter?



The snake is _____ than the caterpillar.

The caterpillar is _____ than the snake.

Look at the picture.
Fill in the blanks with the correct names.



(a) _____ is taller than Max.

(b) Max is taller than _____.

(c) So, _____ is the tallest.

Match.



•

•

4 o'clock



•

•

8 o'clock



•

•

9 o'clock



•

•

half past 5



•

•

half past 8



•

•

half past 9