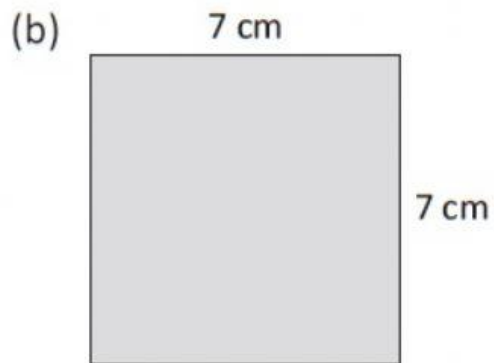


## Practice 6 Perimeter of a Rectangle

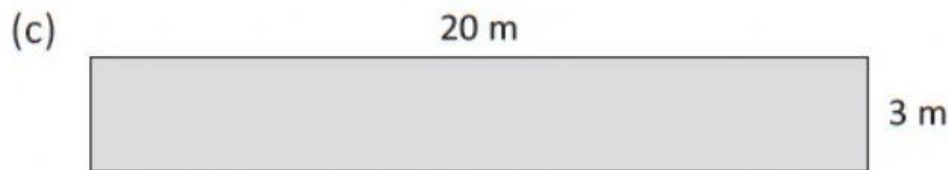
1. Find the perimeter of each figure.  
Give your answers in the correct units.



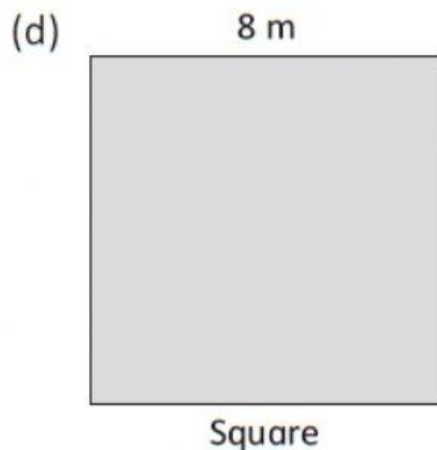
Perimeter = \_\_\_\_\_  
= \_\_\_\_\_



Perimeter = \_\_\_\_\_  
= \_\_\_\_\_



Perimeter = \_\_\_\_\_  
= \_\_\_\_\_



Perimeter = \_\_\_\_\_  
= \_\_\_\_\_