

ESCOLA \_\_\_\_\_

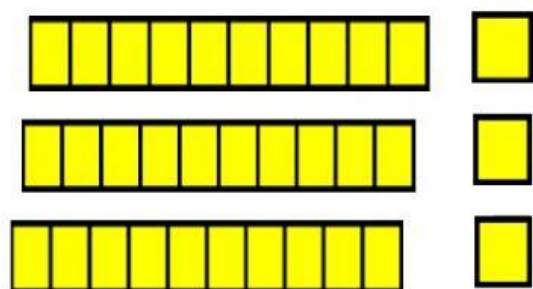
DATA \_\_\_\_\_ SÉRIE \_\_\_\_\_

PRÓ \_\_\_\_\_


ALUNO(A) \_\_\_\_\_

## MATEMÁTICA


CONTE AS UNIDADES, DEZENAS E PINTE O RESULTADO CORRETO:




35    32    33




24    21    20



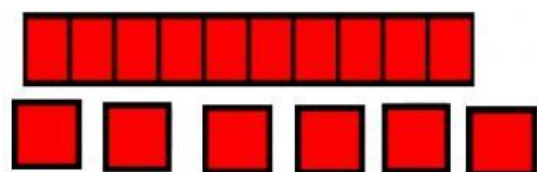
14    17    15



10    8    7



10    20    30



18    17    16