

1.)

Write the value of the digit 3 in the numeral 1 435.

Answer: \_\_\_\_\_ [1]

4.) Write the numeral eight hundred forty two in:

a. standard form

Answer: \_\_\_\_\_ [1]

b. expanded form

Answer: \_\_\_\_\_ [1]

[Go on

5. Complete the chart below.

Words	Numeral
One thousand, one hundred one.	
	3 220





[2]

6. Write each digit of each numeral in the correct place on the chart.

Numerals	Thousands	Hundreds	Tens	Ones
a. 378				
b. 2 002				

[2]

9. Place an 'X' over the pictures that are incorrectly placed.

PLANE SHAPES	SOLID SHAPES
 	 

[2]

10. In the problem  $52 + 24 = 76$ , name

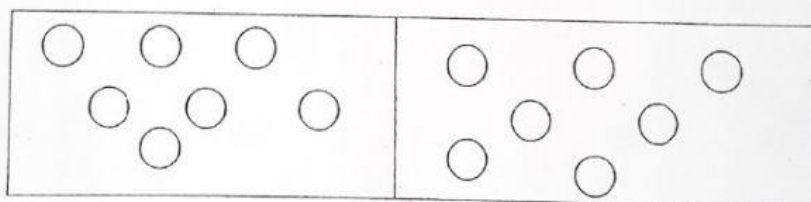
a. the sum.

Answer: \_\_\_\_\_ [1]

b. an addend.

Answer: \_\_\_\_\_ [1]

2. a. Write one addition and one subtraction fact for the picture.



Answer: \_\_\_\_\_ [1]

Answer: \_\_\_\_\_ [1]