


Name : \_\_\_\_\_

Class : \_\_\_\_\_

**Answer all the question.**

**I. The model below can be built from a building set.**

**a. Name the following models.**






1	
2	
3	
4	
5	

**b. Name two other models that can be built.**

1	
2	

**Choose the correct answer.**

**2. Name the shape of these components.**

<b>a.</b> 	<b>b.</b> 	<b>c.</b> 

**3. What is an illustrated manual ?**

**4. Why should you arrange all components neatly after using them?**

We will know which \_\_\_\_\_ is missing.

**5. What should you do when you find that all the components are scattered in the building set box?**

I will arrange every component according to its \_\_\_\_\_,  
\_\_\_\_\_ and \_\_\_\_\_.