

# UNIT 1. THE ORGANISATION OF LIVING THINGS

Name \_\_\_\_\_ Date \_\_\_\_\_

## 1. Answer the questions.

a) What is the name of the **process** of taking in nutrients?

\_\_\_\_\_

b) What is the name of the **process** of reacting to the environment?

\_\_\_\_\_

c) What is the name of the **process** of having children?

\_\_\_\_\_

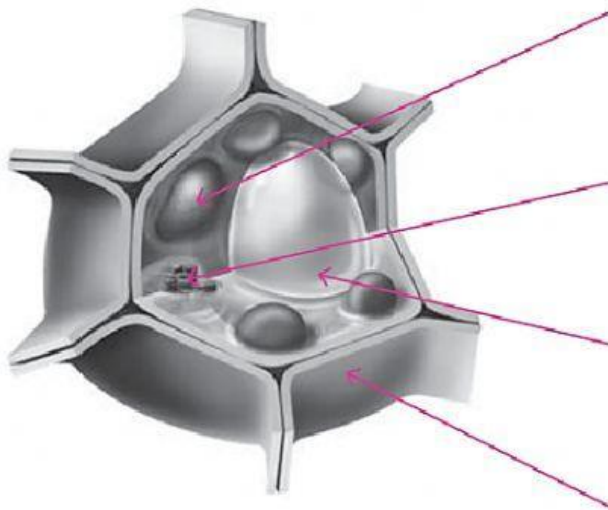
d) What is the name for the **basic units** that all living things are made of?

\_\_\_\_\_

e) What do we call organisms that are made up of **one single cell**?

\_\_\_\_\_

## 2. Complete with the cell parts.



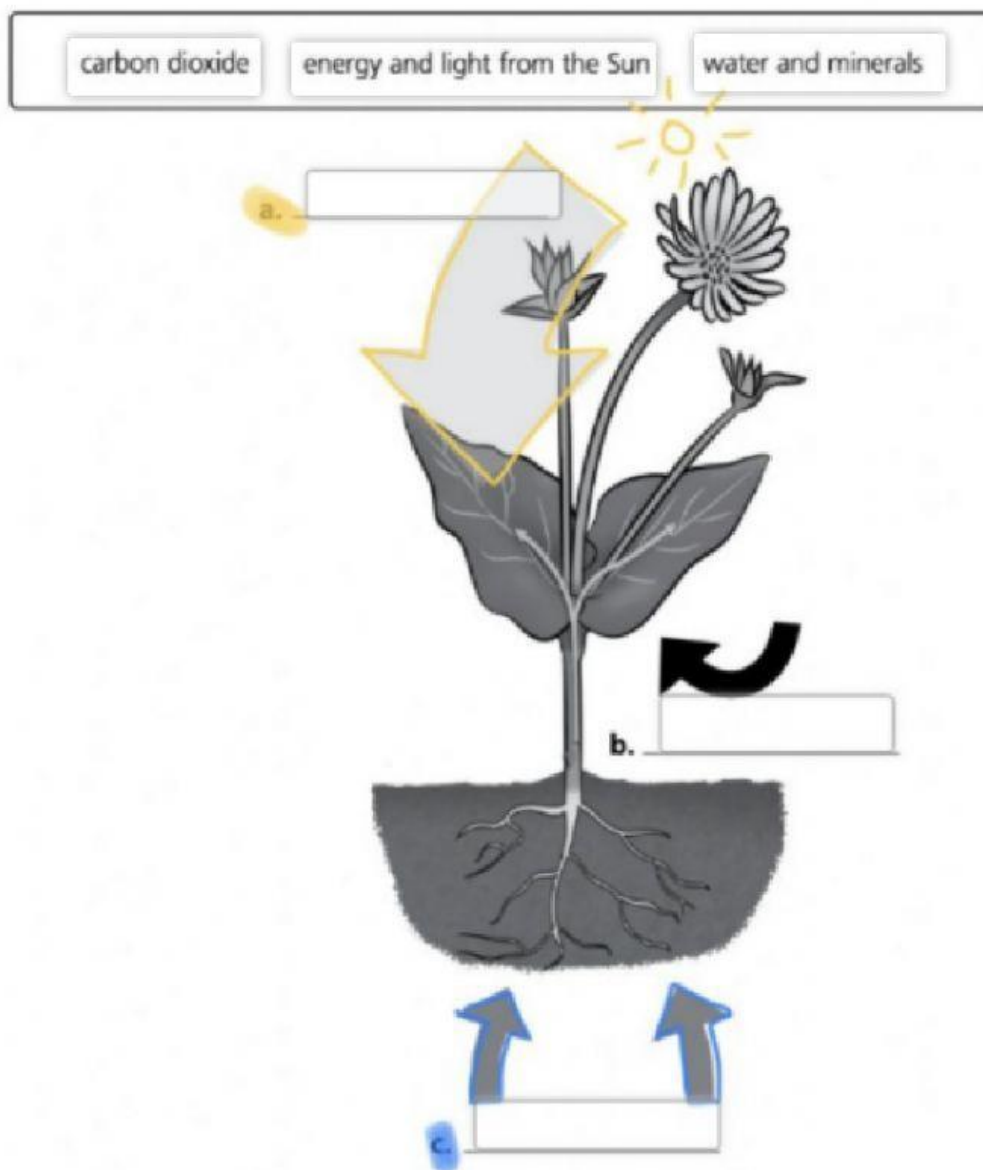
Vacuole  
Nucleus  
Cell wall  
Chloroplasts

# UNIT 1. THE ORGANISATION OF LIVING THINGS

## 3. Vocabulary. Translate into Spanish:

- |            |                |
|------------|----------------|
| - Tissue:  | - Organ:       |
| - Nucleus: | - Raw sap:     |
| - Cells:   | - Oxygen:      |
| - System:  | - Star-shaped: |

## 4. Complete the process of photosynthesis.



# UNIT 1. THE ORGANISATION OF LIVING THINGS

5. Circle the correct answers.

a) What are the three basic life processes?

1. Interaction, nutrition and reproduction
2. Organs, nutrition and reproduction


b) What controls everything that happens inside an animal cell?

1. cytoplasm
2. nucleus

c) What shape are red blood cells?

1. star-shaped
2. flat and circular

6. Draw a plant and where it lives and label its parts.



# UNIT 1. THE ORGANISATION OF LIVING THINGS

7. Complete the levels of organisation of living things.

