

ДВАДЕСЕТ И ПЪРВИ СОФИЙСКИ МАТЕМАТИЧЕСКИ ТУРНИР

1. КЛАС

9 НОЕМВРИ 2019 Г.

Име: _____, училище _____

1. задача

2. задача

3. задача

$5 + 1$	<input type="text"/>	4
$3 - 3$	<input type="text"/>	2
$0 + 3 + 2$	<input type="text"/>	5
$4 + 0 + 1$	<input type="text"/>	$6 - 2$

4. задача



3 3 6
1 4 5









4 6 2
3 4 1













5. задача

	>	!	*
⬠	⬠	⬠	⬠
⬠	⬠	⬠	⬠
⬠	>	!	*

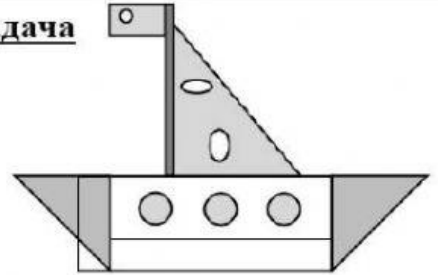
	●	+	=
△			
○			
□			




		>	
			⚠
	⊗		

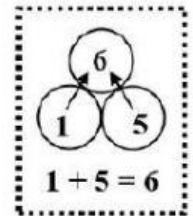














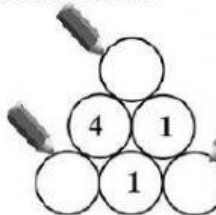
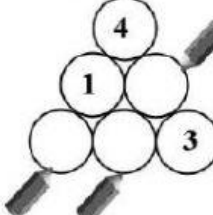
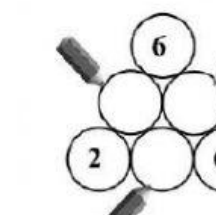
6 задача



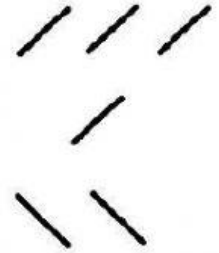


 = 4
 = _____
 = _____

7. задача

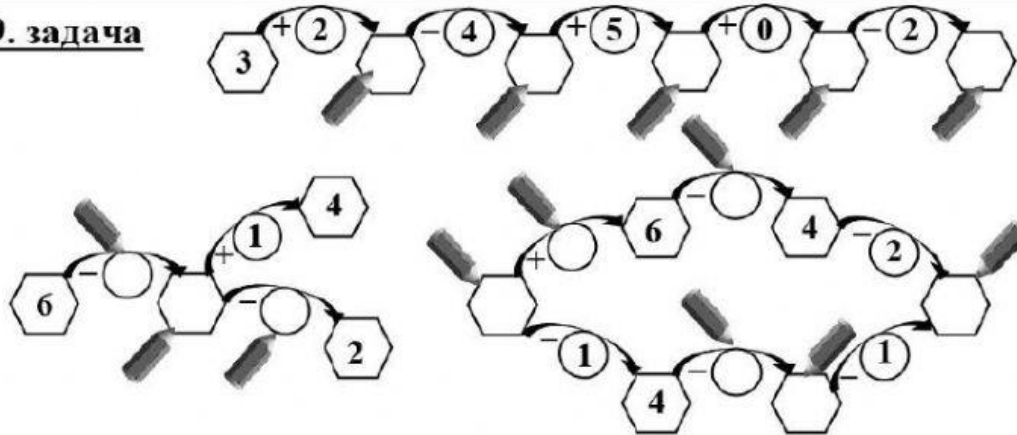


8. задача






9. задача








10. задача








$5 - \text{smiley} = 1$ $\text{smiley} = 4$

 +  +  = 6

 +  -  =  - 

 +  = 4

 -  +  = 6

-  = _____ 
-  = _____ 
-  = _____ 
-  = _____ 