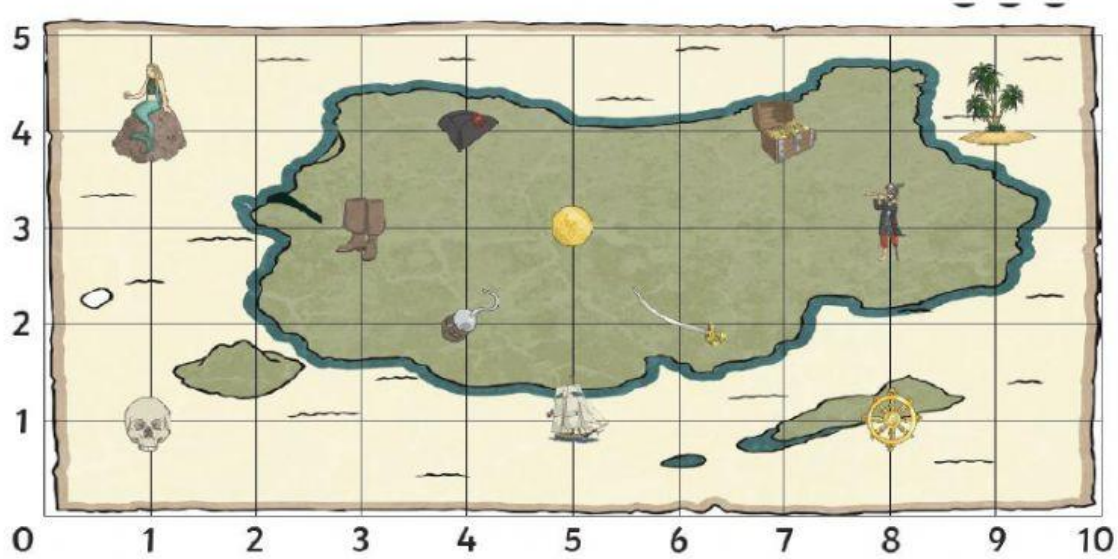




Week 11 – Lesson 2



What is at these coordinates
on the pirate map?

(9,4) = _____


(1,1) = _____


(5,3) = _____


(6,2) = _____


(7,4) = _____


Write the coordinate of these
places on the pirate map:

 = (,)

 = (,)

 = (,)

 = (,)

 = (,)

Plot these coordinates on
the grid using a cross.

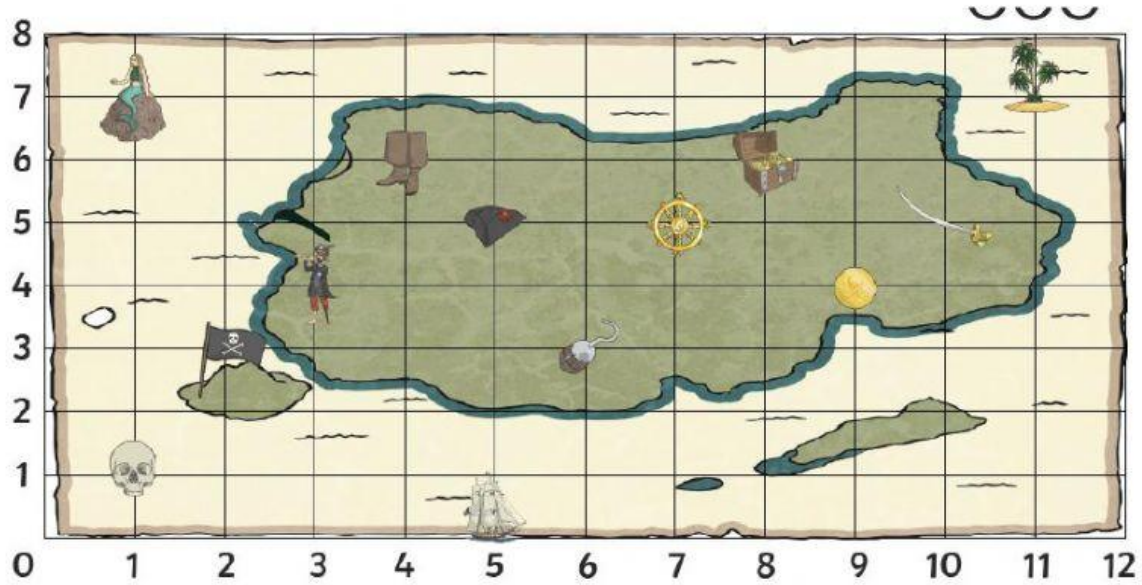
(2,1)

(3,4)

(5,2)

(9,1)

(7,3)



What is at these coordinates on the pirate map?


(1,7) = _____

 $(1,1) =$ _____


$(5,0) =$ _____


 $(9,4) =$ $(8,6) =$


Write the coordinate of these places on the pirate map:

 = (,)

 = (,)

 = (,)

 = (,)

 = (,)

Plot these coordinates on the grid using a cross.

(2,1)

(3,7)

(4,4)

(9,1)

(11,4)