


Mathematics Year 1  
Unit 6: Length, Mass and Volume of Liquid

Name : \_\_\_\_\_

Class : \_\_\_\_\_

**A. Solve the problems.**

- 1 The pictures below show the mass of a papaya and a pineapple.



Compare the mass of the papaya and pineapple.  
Which one is heavier?

- 2 The length of  is 6  .  
The length of  is 4  .  
Which is longer,  or  ?



3

I am taller than Linda.

I am shorter than Kumar.  
I am taller than Linda.



Kumar

Linda

Zain


Who is the tallest?  
Who is the shortest?

The tallest :

The shortest :

4


Look at the pictures. What can you put into the pencil case?



	Ruler
	Pen
	Glue

Tick your answer:

<input type="checkbox"/>	Ruler
<input type="checkbox"/>	Pen
<input type="checkbox"/>	Glue






Look at the pictures above. Compare the mass of the jackfruit, pumpkin and watermelon. Determine the lightest and the heaviest fruit.


The lightest fruit :

The heaviest fruit :


 Aminah pours  into a few  . Her sister drinks 2  . Her friends drink 4  .  
 How many glasses can  fill?

 is equal to   .

B. Complete the letters. What is Nabil's ambition?



a High sandcastle.

b Long bench.

c Short tree.

d Heavy rock.

e Light pail.


f A bottle full of water.

















Nabil's ambition is to be a

<input type="text"/>	<input type="text"/>	<input type="text"/>	<input type="text"/>	<input type="text"/>	<input type="text"/>
----------------------	----------------------	----------------------	----------------------	----------------------	----------------------



C. Complete the sentences below.



- a The length of  is equal to  .
- b The length of  is equal to  .
- c The length of  is  than the .
- d The volume of  is  than the .
- e The volume of  is  than the .
- f The mass of  is equal to  .
- g The mass of  is equal to  .
- h The mass of  is  than the .