

La centaine.

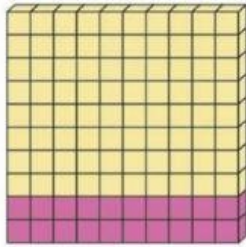
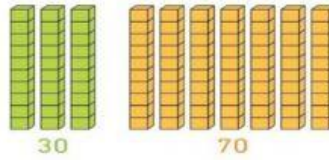
Si tu connais les familles de 10, tu connais les familles de 100. Complète les égalités pour faire 100.



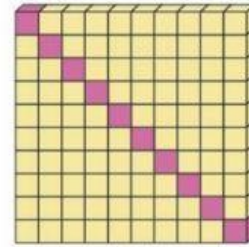
J'observe




Si $3 + 7 = 10$, alors
 $30 + 70 = 100$




$$100 = \boxed{} + \boxed{}$$



$$100 = \boxed{} + \boxed{}$$



$$30 + \boxed{} = 100$$



$$40 + \boxed{} = 100$$