

P3 Math

Unit 3 test



Name: _____

Score : _____

A. Choose the correct answer.

1. The digital time is

a. 12:00

b. 01:00

c. 16:00



2. The digital time is

a. 12:30

b. 11:30

c. 10:30



3. The digital time is

a. 09:45

b. 08:45

c. 08:15



4. A quarter past three.

a. 03:15

c. 03:45

b. 04:35

5. Half past seven.

a. 6:30

c. 7:30

b. 9:30

6. A triangle is a/an....

a. regular polygon

b. irregular polygon

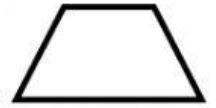
c. has four sides

7. The shape is a/an...

a. regular polygon

b. irregular polygon

c. has four sides

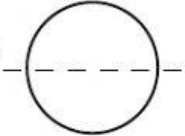


8. Which picture is showing the correct line of symmetry?

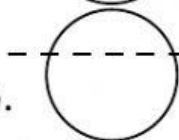
a.



c.




b.

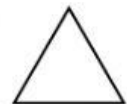


9. Which shape has five sides?

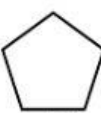
a.



c.

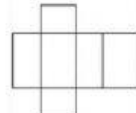


b.

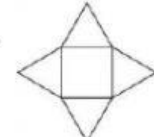


10. The correct net of a cube is.....

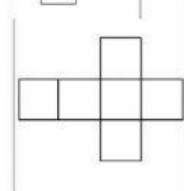
a.



c.



b.



B. Answer

1. It has five corners and five straight sides. It's a

2. A cube has _____faces, _____edges and

_____corners.

3. A pyramid has _____faces, _____edges

and _____corners.

4. A rectangle is a/an _____polygon.

5. 09:15 : _____

- End of test-