



Name: _____




November 3, 2021

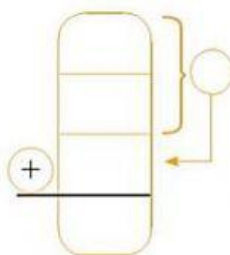
HW pg. 44

ADDITION

- Write the addition and solve it.

Lily, Marcos and Tony are collecting books for the school library. Look at the chart and find the total number of books they have collected.

Lily	
Marcos	
Tony	



Attention!

You can add
3 addends
vertically:

$$\begin{array}{r} 6 \\ 5 \\ + 4 \\ \hline 15 \end{array}$$

11

The kids have collected _____ books.