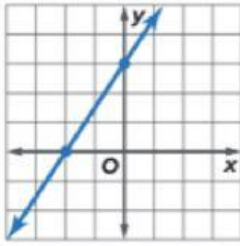
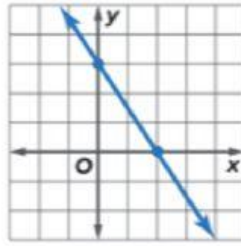
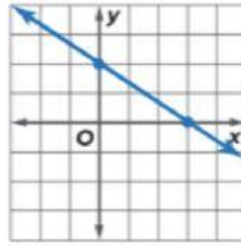


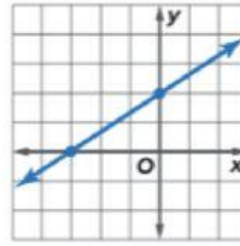
# Power Up! Test Practice

16. Match each equation to the appropriate graph below.










$$2x - 3y = -6$$

$$3x - 2y = -6$$

$$3x + 2y = 6$$

$$2x + 3y = 6$$

17. The equation  $12x - 10y = 600$  represents the total amount Student Council spent on supplies for a school fundraiser. Fill in the boxes to make a true statement.

The x-intercept of the line is  and the y-intercept is .